



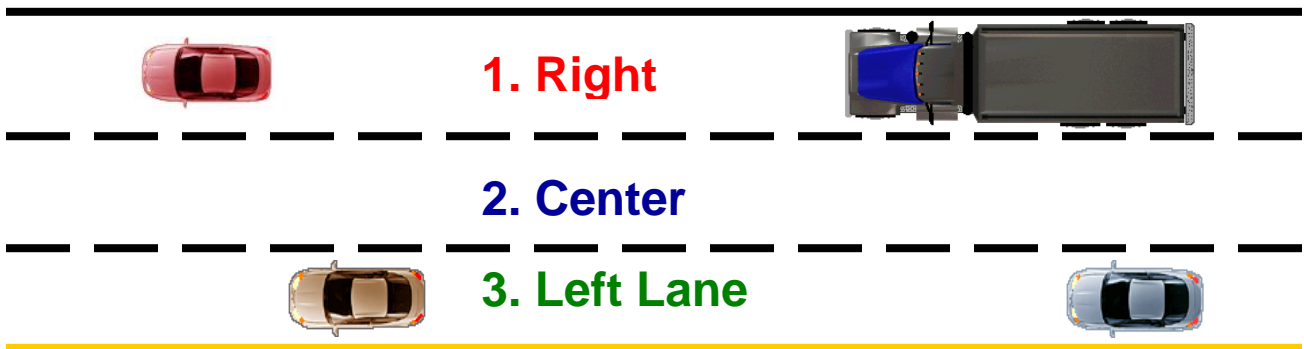
WORK SHEET—2

Module 4.4 Driving on Limited Access Highways

Name _____ Date _____

Score _____

1. Identify four factors on a limited access highway that a driver would use to decide use of a lane.
 - A. _____
 - B. _____
 - C. _____
 - D. _____
2. Describe three reasons a driver would choose not to use the right lane of a limited access highway.
 - A. _____
 - B. _____
 - C. _____
3. You are the driver of the blue car. You plan to exit at the next exit that is about five miles away. What clues will tell you which side of the freeway the exit is located?





WORK SHEET - 1

Module 4.4 Driving on Limited Access Highways

Name _____

Date _____

Score _____

1. List four of the basic characteristics of a limited access highway.

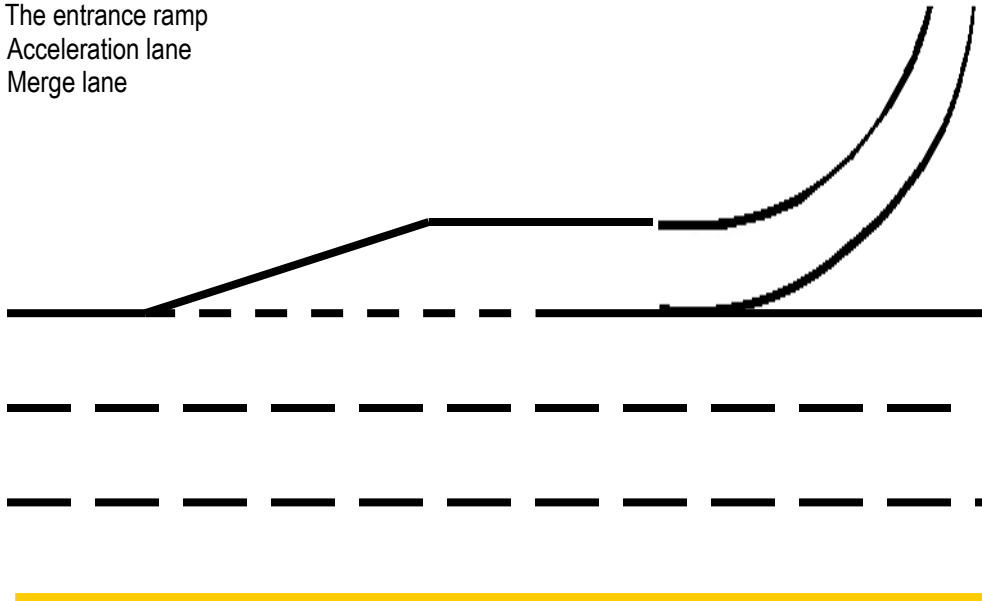
- A. _____
- B. _____
- C. _____
- D. _____

2. Identify four advantages of limited access highways.

- A. _____
- B. _____
- C. _____
- D. _____

3. Identify on the diagram below the three parts to a limited access highway.

- A. The entrance ramp
- B. Acceleration lane
- C. Merge lane



4. Describe the purpose of the entrance ramp.

5. Identify a minimum of four good habits when entering a limited access highway.

1. _____

2. _____

3. _____

4. _____

6. Describe the purpose of the acceleration lane.

7. Identify a minimum of four good habits when using the acceleration lane.

1. _____

2. _____

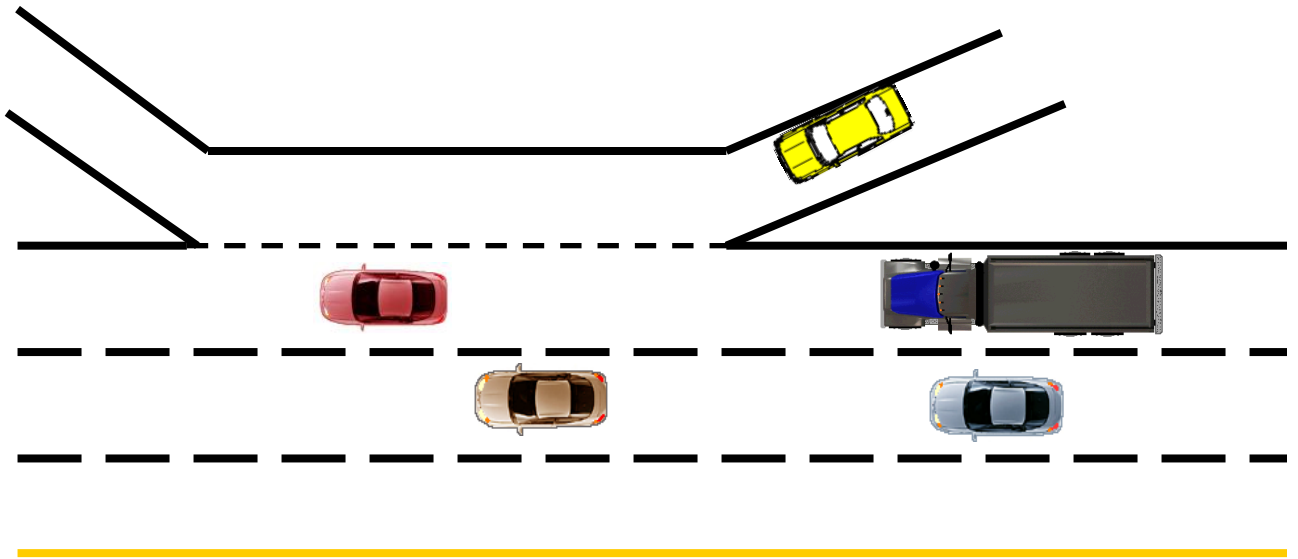
3. _____

4. _____

8. Describe the purpose of the merge lane.

9. List the eight good habits when using the merge lane.

4. You are the driver of the yellow car. This is what you see in your front and left side zone. What action will you take to merge onto the freeway safely?



5. You are the driver of the yellow car. You realize you are on the wrong entrance ramp to the freeway. What action will you take?
